

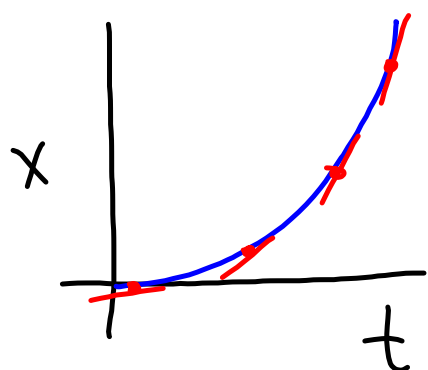


LAB - ACCELERATED MOTION

- Determine experimental value of acceleration due to gravity (g)
- LabQuest Hints:
 - Graph \rightarrow strikethrough data (gets rid of unwanted data)
 - Analyze \rightarrow Curve fit (velocity) \rightarrow Linear



Linearization

t	x	t^2
1	1	1
2	4	4
3	9	9
4	16	16